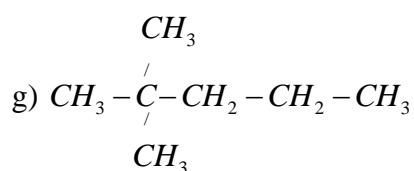
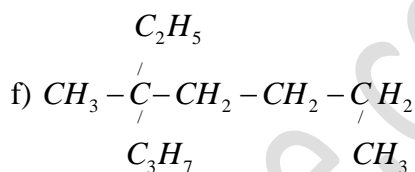
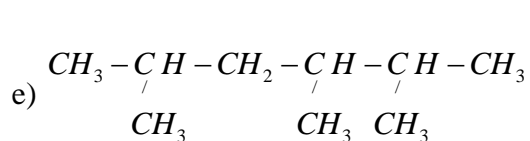
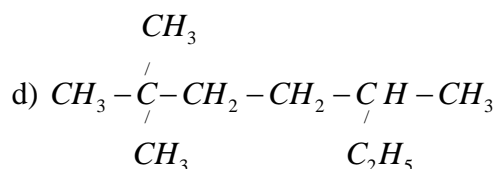
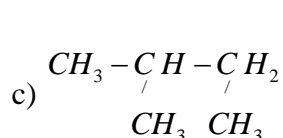
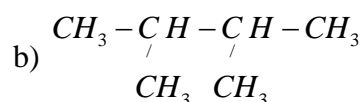
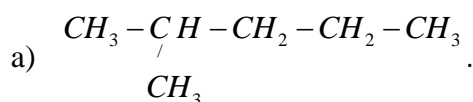


EXERCICE : Chimie

Nommer les alcanes de formule semi-développée :



Solution

Nommons ces différents Alcanes.

- 2-méthylpentane
- 2,3-diméthylbutane
- Méthylbutane
- 2,2,4-triméthylhexane
- 2,3,5-triméthylhexane
- 4-éthyl-4-méthyl-octane
- 2,2-diméthylpentane